


Ratios	Unit Price	Setting a Price	On Sale!	Currency
<u>100</u>	<u>100</u>	<u>100</u>	<u>100</u>	<u>100</u>
<u>200</u>	<u>200</u>	<u>200</u>	<u>200</u>	<u>200</u>
<u>300</u>	<u>300</u>	<u>300</u>	<u>300</u>	<u>300</u>
<u>400</u>	<u>400</u>	<u>400</u>	<u>400</u>	<u>400</u>
<u>500</u>	<u>500</u>	<u>500</u>	<u>500</u>	<u>500</u>

Fred can type 3036 words
in 22 minutes. How many
words can he type in 10
minutes?

He can type 1380 words in 10
minutes.

100



A recipe for chocolate chip cookies contains:

$2\frac{1}{4}$ cups of flour


$\frac{3}{4}$ cups of brown sugar

1 cup of butter

$2\frac{1}{2}$ cup of chocolate chips


What is the ratio of flour to chocolate chips?
Your answer must be in whole numbers!!

The ratio of
Flour to chocolate chips is
9:10




If 4 cans of paint cover
192 m² of wall space,
how many cans of paint
will you need to cover
270 m²?

You will need 5.625 cans,
which will round to 6 cans




A restaurant buys a 4 lb jar of peanut butter for \$10.99. If the restaurant bought \$43.96 worth of peanut butter. How many pounds of peanut butter were purchased?

The restaurant would
get 16 lbs of peanut
butter.




Lumber is purchased by the foot. To purchase 6 pieces of lumber that are each 8 feet long costs \$84.00. How much will it cost to purchase 240 feet of lumber?

The cost to purchase
240 feet of lumber
would cost \$420.00.




It cost Steve \$123.12 to buy
18 novels from an online
book store. How much does
it cost for one novel?

One cost \$6.84
for one novel.



What is the *difference* in price per 1000g between chicken sold at \$23.24/1000g and turkey sold at \$5.17/250 g?

The difference is \$2.56



Which of the following packages of deli meats has the lowest unit price?

i) \$1.89/100g


ii) \$4.80/250g

iii) \$5.97/300g

iv) \$3.34/157g

The lowest unit price is...


i) \$1.89/100g



Noreen is placing tile on her kitchen floor that measures 7.5m by 4.5m.

The tile costs \$16.15 per square meter. How much will Noreen spend on tile?

Noreen will spend
\$545.06 on tile.



Three grocery stores have advertised their price for packages of pork chops:

Store A \$3.25 / 500g

Store B \$5.85 / kg

Store C \$11.38 / 2 kg


What is the unit price for each store, per gram?

(give your answer to 4 decimal places)

Store A \$0.0065 / g


Store B \$0.0059 / g

Store C \$0.0057 / g




Lilly makes and sells jewelry. If it costs her \$16.00 to make a necklace and she marks up the price by 89%, how much will she sell the necklace for?

Lilly will sell the necklace
for \$30.24.




A video game costs \$48.99. If HST is 12%, how much sales tax will you pay?

The amount of sales tax you will
pay is \$5.88 .




Good As New Computers purchases computers for \$325.00 each from a business upgrading its systems. Good As New then refurbishes the computers and sells them for \$422.50 each. What is the markup, in percent, on the refurbished computers?

There is a markup of 30%.



The cost of ingredients has gone up so Andy has decided to increase the cost of food at his NS café by 11%. How much will a customer pay for a sandwich that used to cost \$6.49? Include 15% tax.


The new price of the sandwich
will be \$8.28.



The retail price of a snow blower is \$617.40.


How much will it cost in Saskatchewan with the GST of 5% and the PST of 10%?

The new price (taxes included) of
the snow blower is \$701.01




Calculate the sale price of a coat that regularly sells for \$149.00 and is on sale for 35% off.

The sale price is
\$96.85.




A DVD player is regularly priced at \$139.00. Its sale price is 104.25. What is the discount rate, as a percent.

The discount rate is 25%.




Tracy saw an advertisement for a store sale offering all purses at 15% off. The purse Tracy is interested in retails for \$40.98. How much will the purse cost after 13% HST tax is applied to the price?

The price of the purse will be
\$39.36.




The regular price of a sofa is \$719.99, but it is on sale for 40% off. What will the customer pay if the sofa is sold in Yellowknife, NWT, where tax is 5% GST?

The sofa will cost \$453.59.




Towels are on sale at a department store. The advertisement says, “Buy one, get one half off!”. The regular price of a towel is \$15.20. If you buy 8 towels, how much will it cost you? Do not include tax.

Four towels will cost
\$91.20.




The bank's selling rate for Kenyan shillings is 0.017300. How many shillings will you get for \$150.00 CAD?

**You would get 8670.52
shillings.**




The bank's buying rate
for Brazilian reals is
0.534900. How many
Canadian dollars will
you get 150 reals?

You will get \$80.24 for
150 reals.




**The bank's selling rate for
Czech Republic Koruna is
0.06238 and the buying rate
is 0.06028. How many
koruna will you get for
\$150.00 CAD?**

You will get 2404.62 koruna for
\$150.00



The listed price of a smartphone in Ireland is 250 euros. How much Canadian currency will you need to purchase the phone if 1 euro is worth \$1.580814 CAD?

The smartphone would cost
\$395.20.



Pablo is visiting Canada from Mexico. He is renting a hotel room for 4 nights in Vancouver.

The cost of the hotel room is \$75.00 CAD per night. Pablo exchanges his pesos for Canadian dollars at a bank in Canada.

The bank buying rate is \$0.19779 CAD and selling rate is \$0.08087 CAD. How much will it cost him in Pesos?

The hotel will cost him
1516.76 pesos.

