

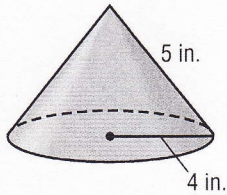
7-8

Practice: Skills

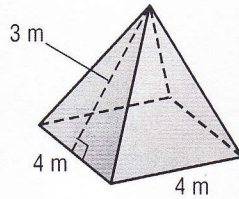
Surface Area of Pyramids and Cones

Find the surface area of each solid. Round to the nearest tenth if necessary.

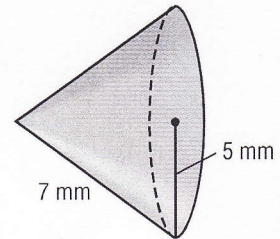
1.



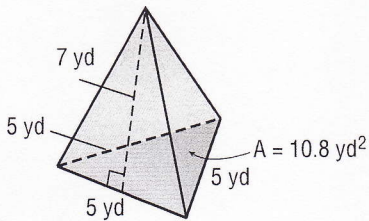
2.



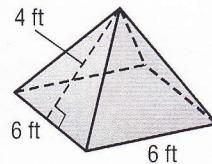
3.



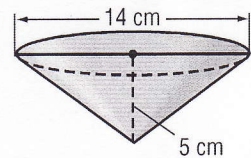
4.



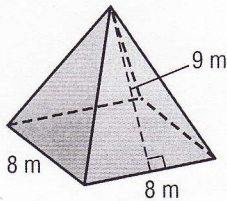
5.



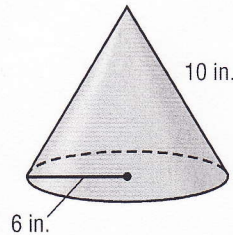
6.



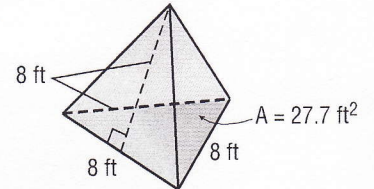
7.



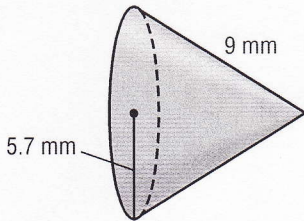
8.



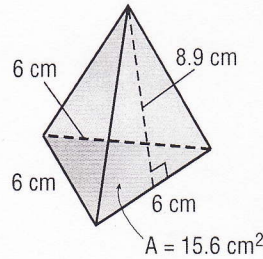
9.



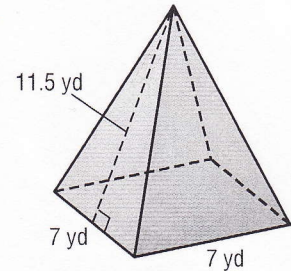
10.



11.



12.



13. square pyramid: base side length, 4 cm; slant height, 7.3 cm

14. square pyramid: base side length, 5 yd; slant height, 12.7 yd

15. cone: diameter, 26 in.; slant height, 8 in.