


REVIEW...

Lesson 2.1 - Inductive Reasoning.wmv

laporte306 54 videos

Mr. Lien's Weekend!



- Mr. Lien was shopping for food on Saturday, when he found a great deal!

0:12 / 3:54

Homework Questions

p. 12 #11, 16, 13

11. Paula claims that whenever you square an odd integer, the result is an odd number. Is her conjecture reasonable? Justify your decision.

$$3^2 = 9$$

Yes

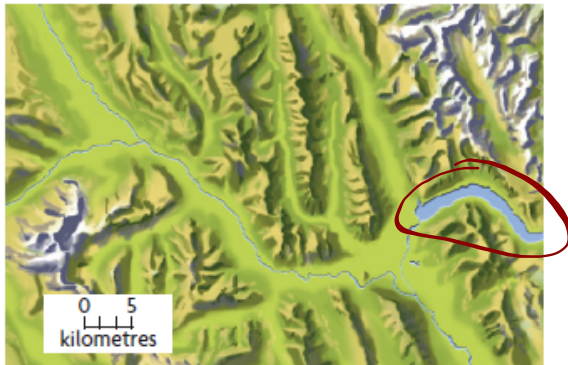
$$(-11)^2 = 121$$

$$(101)^2 = 10201$$

13. Text messages often include cryptic abbreviations, such as L2G (love to go), 2MI (too much information), LOL (laugh out loud), and MTF (more to follow). Make a conjecture about the cryptic abbreviations used in text messages, and provide evidence to support your conjecture.

Conjecture → Use the 1st letter
in each word
TT YL

16. The map below does not have any roads or urban areas marked. However, there is a town of 7000 people somewhere in this area. Make a conjecture about where the town is. Justify your decision.



Conjecture → Towns
were built around
water ways

1.3

Using Reasoning to Find a Counterexample to a Conjecture

GOAL

Invalidate a conjecture by finding a contradiction.

To restate what you have read so far, a conjecture is a mathematical statement that has been proposed as a true statement, but not yet proven or disproved.

Once a conjecture is proven, it is a mathematical **fact**.

One method to test a conjecture is to attempt to **disprove** it by using a **counterexample**.

For example:

Conjecture: All prime numbers are odd.

Counterexample: But 2 is a prime number.

The counterexample disproves the conjecture, hence we can conclude that not all prime numbers are odd.

EXAMPLE #2:

Conjecture:



For all real numbers x , the expressions x^2 is greater than or equal to x

Conjecture: For all real numbers x , the expressions x^2 is greater than or equal to x

Here is a counterexample:

$(0.5)^2 = 0.25$, and 0.25 is **not** greater than or equal to 0.5

In fact, any number between 0 and 1 is a counterexample. The conjecture is false.

COUNTEREXAMPLE???

PAGE 21

EXAMPLE 3

Using reasoning to find a counterexample to a conjecture

Matt found an interesting numeric pattern:

$$1 \cdot 8 + 1 = 9$$

$$12 \cdot 8 + 2 = 98$$

$$123 \cdot 8 + 3 = 987$$

$$1234 \cdot 8 + 4 = 9876$$

Matt thinks that this pattern will continue.

Search for a counterexample to Matt's conjecture.

Kublu's Solution

$$1 \cdot 8 + 1 = 9$$

$$12 \cdot 8 + 2 = 98$$

$$123 \cdot 8 + 3 = 987$$

$$1234 \cdot 8 + 4 = 9876$$

The pattern seemed to be related to the first factor (the factor that wasn't 8), the number that was added, and the product.

	A	B
1	$1 \cdot 8 + 1$	9
2	$12 \cdot 8 + 2$	98
3	$123 \cdot 8 + 3$	987
4	$1234 \cdot 8 + 4$	9876
5	$12345 \cdot 8 + 5$	98765
6	$123456 \cdot 8 + 6$	987654
7	$1234567 \cdot 8 + 7$	9876543
8	$12345678 \cdot 8 + 8$	98765432
9	$123456789 \cdot 8 + 9$	987654321

I used a spreadsheet to see if the pattern continued. The spreadsheet showed that it did.

$$12345678910 \cdot 8 + 10 = 98765431290$$

$$1234567890 \cdot 8 + 10 = 9876543130$$

$$12345678910 \cdot 8 + 0 = 98765431280$$

$$1234567890 \cdot 8 + 0 = 9876543120$$

When I came to the tenth step in the sequence, I had to decide whether to use 10 or 0 in the first factor and as the number to add. I decided to check each way that 10 and 0 could be represented.

The pattern holds true until 9 of the 10 digits are included. At the tenth step in the sequence, a counterexample is found.

Since the pattern did not continue, Matt's conjecture is invalid.

Revised conjecture: When the value of the addend is 1 to 9, the pattern will continue.

I decided to revise Matt's conjecture by limiting it.

Your Turn

If Kublu had not found a counterexample at the tenth step, should she have continued looking? When would it be reasonable to stop gathering evidence if all the examples supported the conjecture? Justify your decision.

**Answer**

Mathematical HISTORY???

Goldbach's Conjecture

One famous example of an unproven conjecture has remained undecided for nearly 300 years.

In the early 1700's, Christian Goldbach, a Prussian mathematician, noticed that many even numbers greater than 2 can be written as the sum of two primes. Expanding on examples like these, Goldbach wrote the following conjecture:

$4 = 2 + 2$	$10 = 3 + 7$	$16 = 3 + 13$
$6 = 3 + 3$	$12 = 5 + 7$	$18 = 5 + 13$
$8 = 3 + 5$	$14 = 3 + 11$	$20 = 3 + 17$

Conjecture: Every even number greater than 2 can be written as the sum of two primes.

To this day, no one has proven **Goldbach's Conjecture** or found a counterexample to show that it is false. It is still unknown whether this conjecture is true or false. It is known, however, that all even numbers up to 4×10^{18} confirm Goldbach's Conjecture.



Christian Goldbach (1690 – 1764) was a German mathematician famous for his eponymous Conjecture. Goldbach's Conjecture is one of the most infamous problems in mathematics, and states that every even integer number greater than 2 can be expressed as the sum of two prime numbers. For example, $4=2+2$, $6=3+3$, and $8=3+5$. While there have not been any counter-examples found up through 4×10^{18} (as of 2012), the conjecture has not yet been formally proven.

1.2

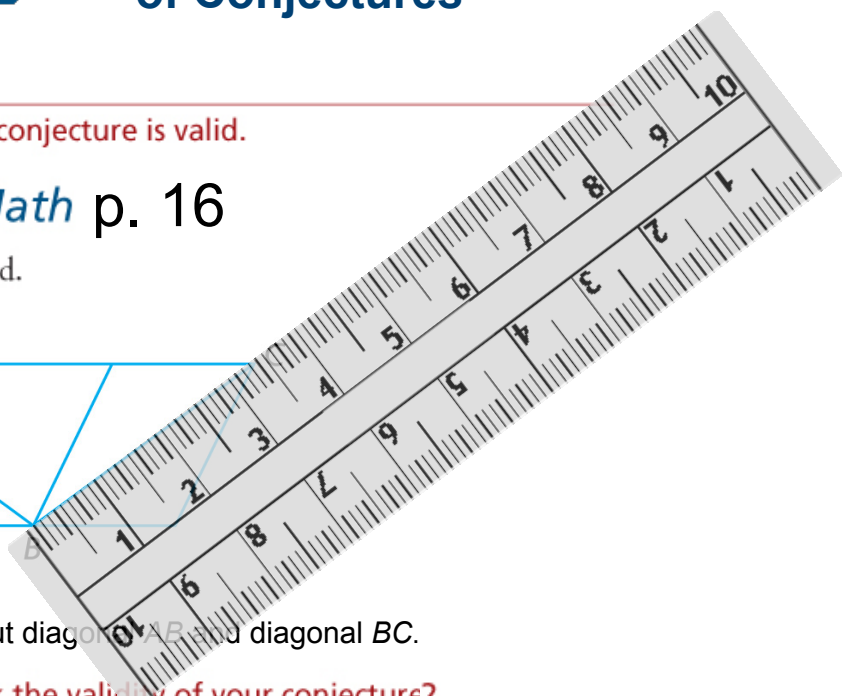
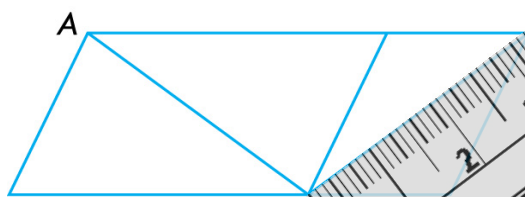
Exploring the Validity of Conjectures

GOAL

Determine whether a conjecture is valid.

EXPLORE *the Math* p. 16

Your brain can be deceived.




Make a conjecture about diagonal AC and diagonal BC .

? How can you check the validity of your conjecture?

EXPLORE the Math

Your brain can be deceived.




Make a conjecture about the circles in the centre.

? How can you check the validity of your conjecture?

EXPLORE the Math

Your brain can be deceived.

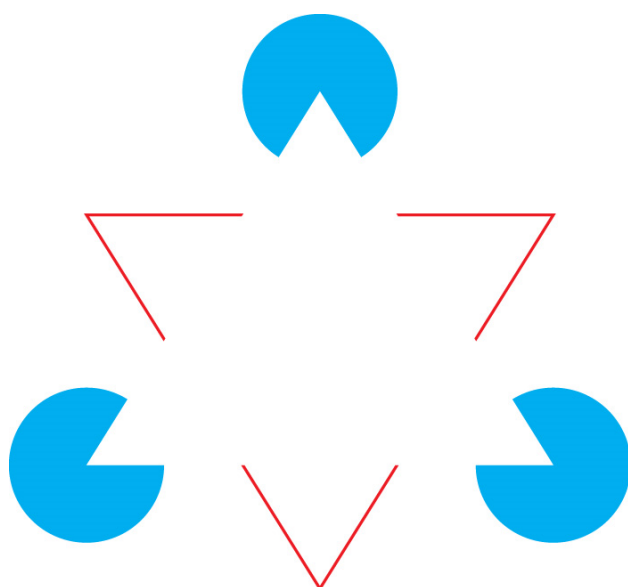


Make a conjecture about the lines.

? How can you check the validity of your conjecture?

EXPLORE the Math

Your brain can be deceived.



Make a conjecture about the number of triangles.

? How can you check the validity of your conjecture?

Reflecting

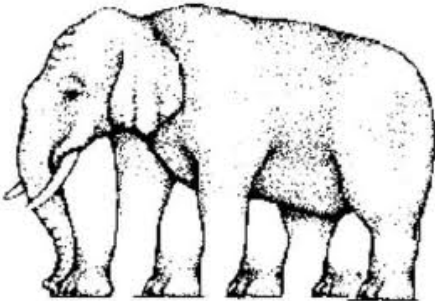


- A. Describe the steps you took to verify your conjectures.
- B. After collecting evidence, did you decide to revise either of your conjectures? Explain.
- C. Can you be certain that the evidence you collect leads to a correct conjecture? Explain.

Answers

- A. Both measurement and visual inspection helped to verify or discredit the conjectures.
- B. My conjectures changed as follows after collecting more evidence:
 - First image: Both diagonals are the same length.
 - Second image: The centre circles of the figures are the same size.
 - Third image: The rows and columns of white and black shapes are placed in straight lines.
 - Fourth image: There are no triangles in the figure.
- C. For these images, the revised conjectures hold true for the accuracy of the tools I used. I cannot be absolutely sure that my new conjectures are valid until the precision of the tools is considered.

Some other optical illusions...

nallihana@nbed.nb.ca




M. C. Escher...

<http://www.mcescher.com/>



Three Dragons



 three_dragons.wmv


3D Chalk Art.. Julian Beever

extreme 3D sidewalk chalk drawings.

moviemagician101

Subscribe

22 videos



*"Julian Beever is an English, Belgium-based chalk artist who has been creating trompe-l'œil chalk drawings on pavement surfaces since the mid-1990s. His works are created using a projection called **anamorphosis**, and create the illusion of three dimensions when viewed from the correct angle."*

44 Amazing Julian Beever's 3D Pavement Drawings

1.2 - Validity of Conjectures?

In Summary page 17

Key Idea

- Some conjectures initially seem to be valid, but are shown not to be valid after more evidence is gathered.

Need to Know

- The best we can say about a conjecture reached through inductive reasoning is that there is evidence either to support or deny it.
- A conjecture may be revised, based on new evidence.

1.3 - Counterexamples

In Summary page 22

Key Ideas

- Once you have found a counterexample to a conjecture, you have disproved the conjecture. This means that the conjecture is invalid.
- You may be able to use a counterexample to help you revise a conjecture.

Need to Know

- A single counterexample is enough to disprove a conjecture.
- Even if you cannot find a counterexample, you cannot be certain that there is not one. Any supporting evidence you develop while searching for a counterexample, however, does increase the likelihood that the conjecture is true.

HOMework...

p. 17: #1 & 2

p. 22: #1, 3, 5, 8, 12, 17

Attachments

1s3e3 final.mp4

three_dragons.wmv