

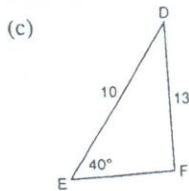
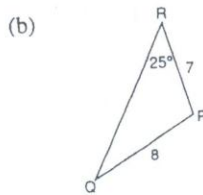
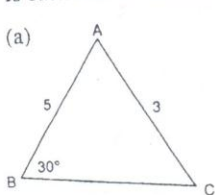
THE AMBIGUOUS CASE (LAW OF SINES)

A Express lengths to one decimal place and angles to the nearest degree.

1 For each $\triangle ABC$, decide what type of solution you will obtain for $\angle B$.

- (a) $a = 45, b = 75, \angle A = 76^\circ$
- (b) $\angle A = 48^\circ, a = 26, b = 22$
- (c) $b = 576, a = 730, \angle A = 31^\circ$
- (d) $a = 15.6, b = 25.4, \angle A = 69^\circ$

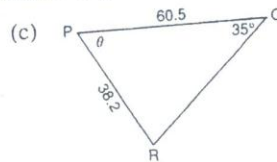
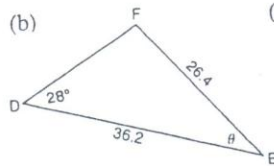
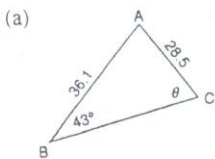
2 Is each sketch reasonable? Draw a better sketch for any that are unreasonable.



3 If $0^\circ \leq A \leq 180^\circ$, find two values for A for each.

- (a) $\sin A = 0.7431$
- (b) $\sin A = 0.3907$
- (c) $\sin A = 0.7169$
- (d) $\sin A = 0.8686$

4 For each triangle, find the measure, or possible measures, of angle θ .



5 Solve each $\triangle ABC$.

- (a) $a = 65.5, b = 78.4, \angle A = 51^\circ$
- (b) $b = 15, c = 55, \angle B = 75^\circ$
- (c) $b = 16.3, c = 18.2, \angle B = 54^\circ$
- (d) $b = 25.5, c = 22.5, \angle C = 62^\circ$

6 Two forest fire stations, P and Q, are 20.0 km apart. A ranger at station Q sees a fire 15.0 km away. If the angle between the line PQ and the line from P to the fire is 21° , find how far station P is from the fire.

7 A marathon swimmer starts at Island A, swims 9.2 km to Island B and then 8.6 km to Island C. If $\angle BAC = 52^\circ$, how far does she have to swim back to Island A?

8.7 Exercise, page 249
 1. a) no solution b) 1 solution c) 1 solution d) no solution 2. a) Yes, but another sketch is possible b) yes—1 solution c) yes—1 solution 3. a) $48^\circ, 132^\circ$ b) $23^\circ, 157^\circ$ c) $46^\circ, 134^\circ$ d) $60^\circ, 120^\circ$ 4. a) 60° or 120° b) $112^\circ, 12^\circ$ c) $30^\circ, 80^\circ$ 5. a) (1) $\angle A = 51^\circ, \angle B = 68^\circ, \angle C = 81^\circ, a = 65.5, b = 78.4, c = 73.7$ (2) $\angle A = 51^\circ, \angle B = 112^\circ, \angle C = 17^\circ, a = 65.5, b = 78.4, c = 24.6$ b) no solution c) $\angle A = 28^\circ, \angle B = 90^\circ, \angle C = 62^\circ, a = 12.0, b = 25.5, c = 22.5$ d) no solution 6. 2 answers: 32.1 km or 5.8 km 7. 2 answers: 10.3 km or 1.0 km 8. 45.7 m