

Write $\frac{4}{5}$ as a decimal.

0.8



What is a rational number?

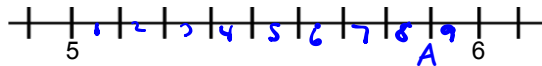
You must be specific about three things!

fraction
As a decimal ends or repeats

State two rational numbers between -5.4 and -5.5

\leftarrow $\frac{1}{10}$ \rightarrow
-5.5 -5.4
-5.41 -5.42

Express A as a mixed fraction.



$5\frac{8}{9}$

Write two equivalent fractions!


$\frac{-8}{9}$

$-\frac{8}{9}$ $\frac{8}{-9}$

Problems with the homework?

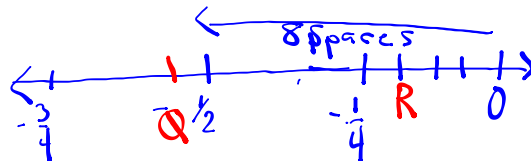
Page 101 5 - 11, 12 a, e, h

12. h) -2.98 -2.99



-2.987
-2.981
-2.982

10. d)

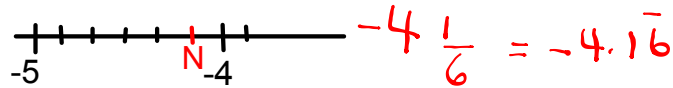


16 spaces between numbers (of -1)

R $-\frac{3}{16}$
Q $-\frac{9}{16}$

Quiz

- Write the rational number that is indicated on the line. Write as a fraction and as a decimal.




- Write three rational numbers between the given numbers -5.6 and 5.7.

Handwritten answers in red ink:
 5.61 4.21
 5.65
 5.67

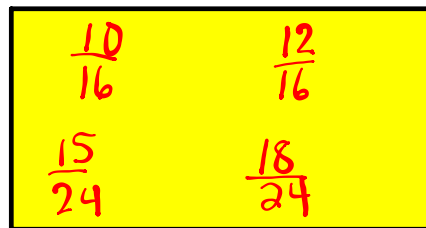
Find two rational numbers between...

(Decimals may be used on this side.)



Handwritten answers in red ink:
 -0.476
 -0.477

(NO Decimals please!!.)



Handwritten equation in red ink: $\frac{16}{24} = \frac{2}{3}$

Handwritten fraction in red ink: $\frac{17}{24}$

Solve your work

Which rational number is larger??

(Decimals may be used on this side.)

$\frac{-12}{15}$ ✓

$\frac{-13}{16}$

-0.8

-0.8125

↑
S
h
o
w
y
o
u
r
w
o
r
k
!
↓

(NO Decimals please!!.)

$\frac{2}{3}$

$\frac{3}{4}$ ✓

$\frac{8}{12}$

$\frac{9}{12}$

$\frac{16}{24}$

$\frac{18}{24}$

Page 101



Questions:
5 - 12(a,e,h)

Pages 102-103

13-27