

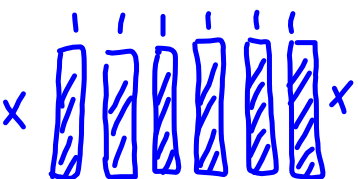
Warm Up

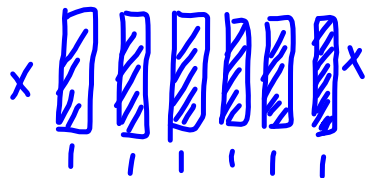
Dec 16

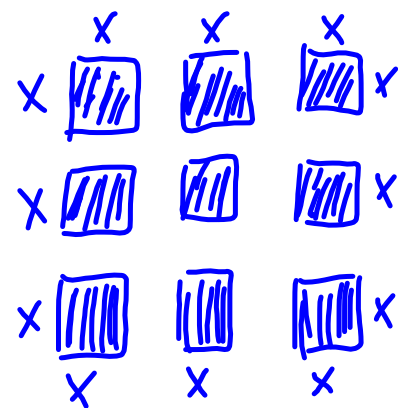
Complete the table for the following polynomials.

	numerical coefficient(s)	variable	# terms	degree	constant
$7 - 2x + 5x^2$	-2, 5	x	3	2	7
$a + 6$	1	a	2	1	6
$-2b^2 + 3a^2$	-2, 3	a, b	2	2	0
$6p$	6	p	1	1	0

Homework Problems?

6.a)  $P = 4x + 12$



b)  $P = 12x$

Concept Reinforcement

Extra Practice 3 & 4