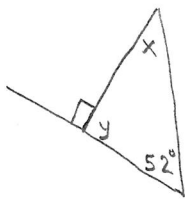


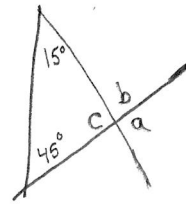
I)



$$\angle y = \underline{\hspace{2cm}} (\quad)$$

$$\angle x = \underline{\hspace{2cm}} (\quad)$$

J)

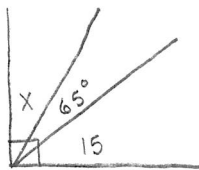


$$\angle c = \underline{\hspace{2cm}} (\quad)$$

$$\angle a = \underline{\hspace{2cm}} (\quad)$$

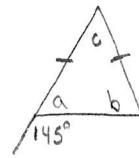
$$\angle b = \underline{\hspace{2cm}} (\quad)$$

K)



$$\angle x = \underline{\hspace{2cm}} (\quad)$$

L)



$$\angle a = \underline{\hspace{2cm}} (\quad)$$

$$\angle b = \underline{\hspace{2cm}} (\quad)$$

$$\angle c = \underline{\hspace{2cm}} (\quad)$$