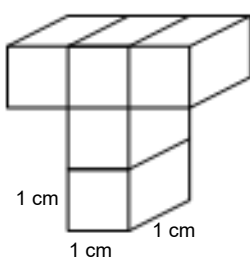


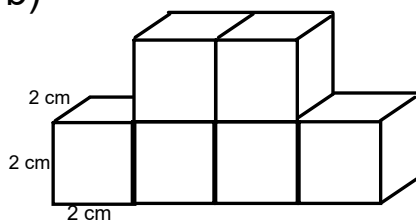
Surface Area of Composite Shapes

1) Calculate the surface area of the following shapes (SHOW ALL WORK)

a)

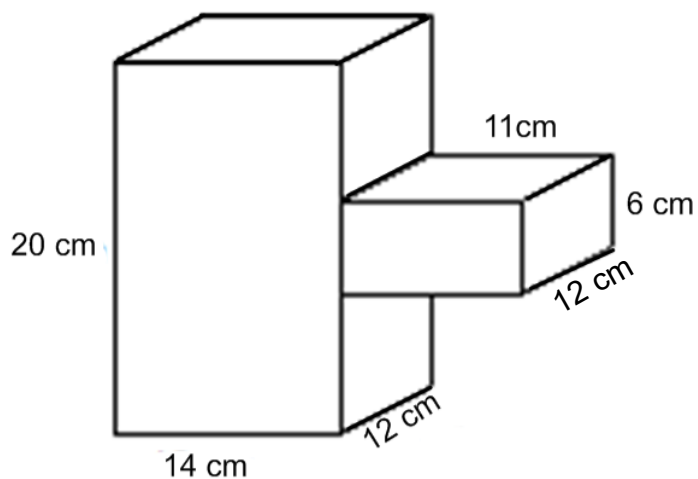


b)



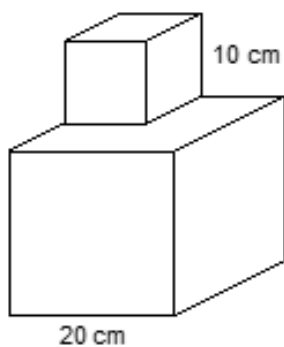
•

2) Calculate the total surface area of the following: (Show all work)



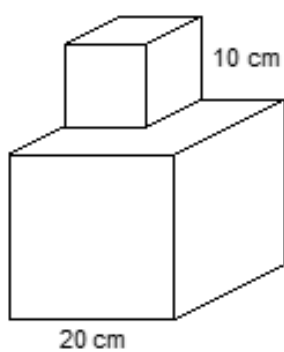
Formulas and
Diagrams of faces
MUST BE
INCLUDED

3) Calculate the total surface area of the following, a 10 cm cube on top of a 20 cm cube: (Show all work)



Formulas and
Diagrams of faces
MUST BE
INCLUDED

- 3) Calculate the total surface area of the following, a 10 cm cube on top of a 20 cm cube: (Show all work)



Formulas and
Diagrams of faces
MUST BE
INCLUDED