

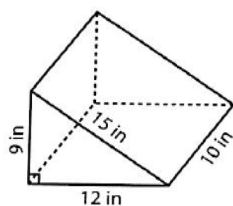
★ Show all work on your own paper ★
→ formulas must be stated

S1

Surface Area of Mixed Shapes

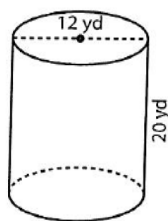
Find the surface area of each shape. (use $\pi = 3.14$)

1)



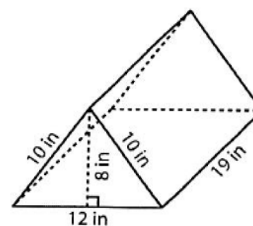
Surface Area = _____

2)



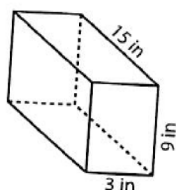
Surface Area = _____

3)



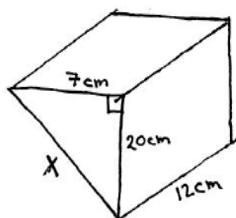
Surface Area = _____

4)



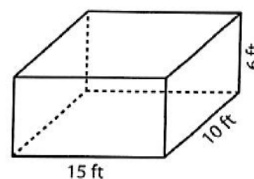
Surface Area = _____

5)



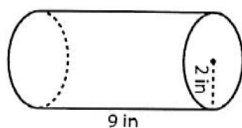
Surface Area = _____

6)



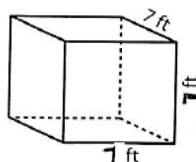
Surface Area = _____

7)



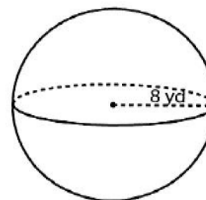
Surface Area = _____

8)



Surface Area = _____

9)



Surface Area = _____